

Correction

Mesures d'aires

Indique l'aire des figures suivantes, en laissant apparaître tes calculs.

1)

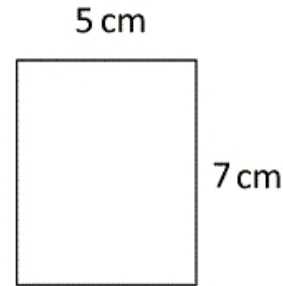


$$3 \times 8 = 24$$

Calculs :

Aire :24..... cm².

2)

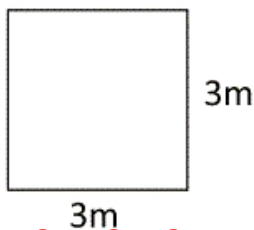


$$5 \times 7 = 35$$

Calculs :

Aire :35..... cm².

3)

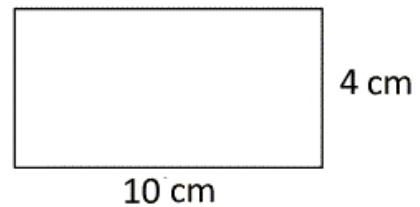


$$3 \times 3 = 9$$

Calculs :

Aire :9..... m².

4)

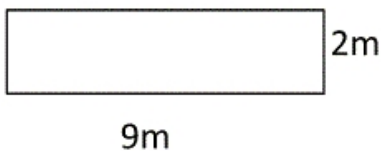


$$4 \times 10 = 40$$

Calculs :

Aire :40..... cm².

5)




$$2 \times 9 = 18$$

Calculs :

Aire :18..... m².

6)



$$5 \times 8 = 40$$

Calculs :

Aire :40..... cm².