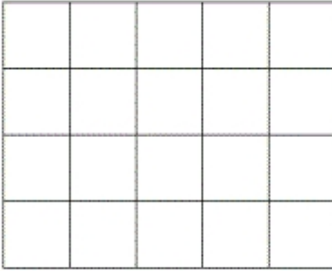


# Mesures d'aires

Indique l'aire des figures suivantes, en laissant apparaître tes calculs.


1)



Calculs : .....  $5 \times 4 = 20$  .....

Aire : .....  $20$  .....  $\text{cm}^2$ .

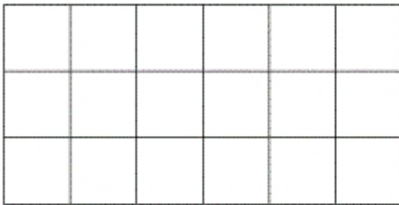
2)



Calculs : .....  $3 \times 4 = 12$  .....

Aire : .....  $12$  .....  $\text{cm}^2$ .

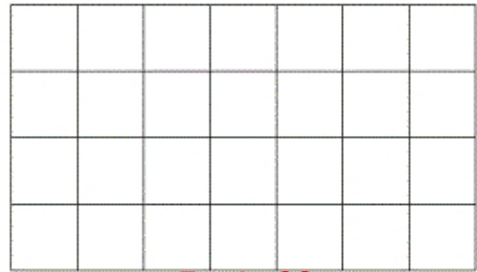
3)



Calculs : .....  $6 \times 3 = 18$  .....

Aire : .....  $18$  .....  $\text{cm}^2$ .


4)



Calculs : .....  $7 \times 4 = 28$  .....

Aire : .....  $28$  .....  $\text{cm}^2$ .

5)



5cm

3cm

Calculs : .....  $3 \times 5 = 15$  .....

Aire : .....  $15$  .....  $\text{cm}^2$ .

6)



4cm

4cm

Calculs : .....  $4 \times 4 = 16$  .....

Aire : .....  $16$  .....  $\text{cm}^2$ .